
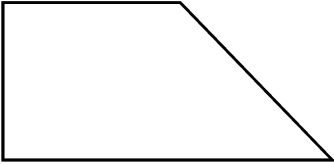


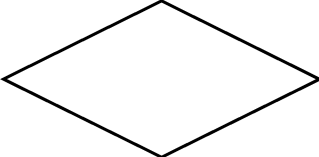


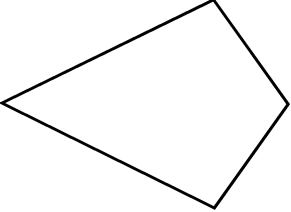


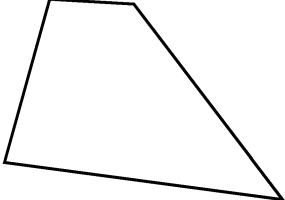
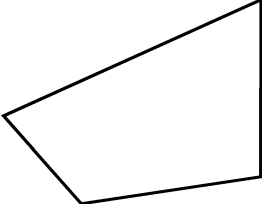

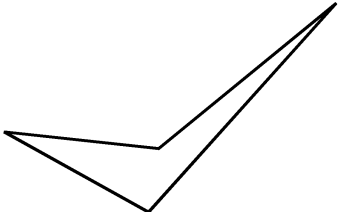

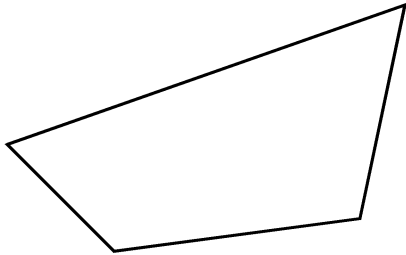


# Quadrilateral Cards

Cut cards apart on thin lines.

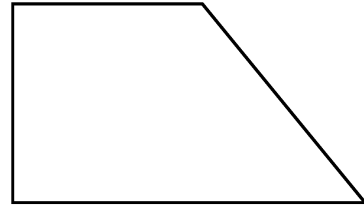
<p><b>Rectangle A</b></p> 	<p><b>Trapezoid A</b></p> 	<p><b>Quadrilateral A</b></p> 
<p><b>Square A</b></p> 	<p><b>Rhombus A</b></p> 	<p><b>Parallelogram A</b></p> 
<p><b>Trapezoid B</b></p> 	<p><b>Quadrilateral B</b></p> 	<p><b>Square B</b></p> 
<p><b>Parallelogram B</b></p> 	<p><b>Quadrilateral C</b></p> 	<p><b>Quadrilateral D</b></p> 
<p><b>Rectangle B</b></p> 	<p><b>Quadrilateral E</b></p> 	<p><b>Square C</b></p> 

# Check Your Quadrilaterals




## **Quadrilateral**

Any Polygon with 4 sides




## **Trapezoid**

A quadrilateral with exactly 1 pair of parallel sides



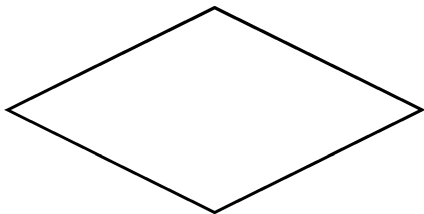
## **Parallelogram**

A quadrilateral with 2 pairs of parallel sides opposite each other



## **Rectangle**

A parallelogram with 4 right angles



## **Rhombus**

A parallelogram with 4 congruent sides



## **Square**

A parallelogram with 4 congruent sides **and** 4 right angles

# Guess My Quadrilateral Riddles

## Riddle 1

- 1 My quadrilateral has 2 pairs of parallel sides.
- 2 My quadrilateral has 4 congruent sides.
- 3 My quadrilateral has 4 right angles.
- 4 My quadrilateral has a perimeter of 12 centimeters.

## Riddle 2

- 1 My quadrilateral is not a parallelogram. (Remember that any quadrilateral with 2 pairs of parallel sides is a parallelogram.)
- 2 My quadrilateral has exactly 1 pair of parallel sides.
- 3 My quadrilateral has more than 1 type of angle.
- 4 My quadrilateral has exactly 2 right angles.

## Riddle 3

- 1 My quadrilateral is a parallelogram. (Remember that any quadrilateral with 2 pairs of parallel sides is a parallelogram.)
- 2 My quadrilateral does not have any line segments that are perpendicular to each other.
- 3 My quadrilateral does not have 4 congruent sides.
- 4 My quadrilateral has a perimeter of 12 centimeters.

## Riddle 4

- 1 My quadrilateral has at least 1 line of symmetry.
- 2 My quadrilateral has 2 obtuse angles.
- 3 My quadrilateral has at least 1 pair of parallel sides.
- 4 My quadrilateral has 4 congruent sides.