

Name: _____

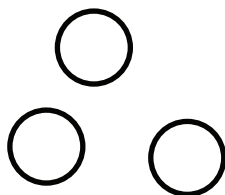
Date: _____

NUMBER IDENTIFICATION CHECK-IN


Circle the number that matches the amount of objects.



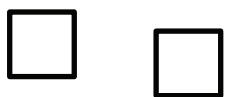
7 4 5



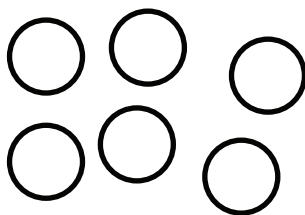
3 1 2



9 4 7




4 6 2



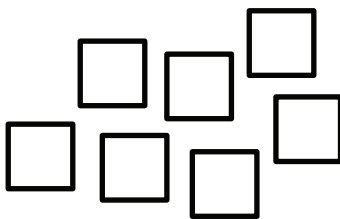
7 6 8



9 0 1




4 5 3

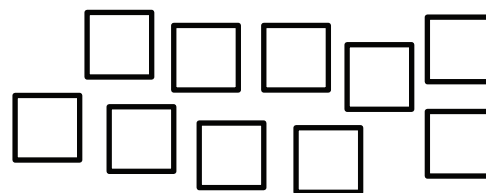


8 7 9

2 0 9



9 7 8



10 4 1