


Name _____ Date _____



Division Facts: Nines

Hãy thực hiện phép tính nhân và phép tính chia.

$$\begin{array}{r} \boxed{1} \\ \times 9 \\ \hline 9 \end{array} \rightarrow 9 \overline{)9}$$

$$\begin{array}{r} \boxed{} \\ \times 9 \\ \hline 18 \end{array} \rightarrow 9 \overline{)18}$$

$$\begin{array}{r} \boxed{} \\ \times 9 \\ \hline 27 \end{array} \rightarrow 9 \overline{)27}$$

$$\begin{array}{r} \boxed{} \\ \times 9 \\ \hline 36 \end{array} \rightarrow 9 \overline{)36}$$

$$\begin{array}{r} \boxed{} \\ \times 9 \\ \hline 45 \end{array} \rightarrow 9 \overline{)45}$$

$$\begin{array}{r} \boxed{} \\ \times 9 \\ \hline 54 \end{array} \rightarrow 9 \overline{)54}$$

$$\begin{array}{r} \boxed{} \\ \times 9 \\ \hline 63 \end{array} \rightarrow 9 \overline{)63}$$

$$\begin{array}{r} \boxed{} \\ \times 9 \\ \hline 72 \end{array} \rightarrow 9 \overline{)72}$$

$$\begin{array}{r} \boxed{} \\ \times 9 \\ \hline 81 \end{array} \rightarrow 9 \overline{)81}$$

Giải các bài toán chia sau.

$$\begin{array}{r} \boxed{10} \\ 9 \overline{)90} \end{array}$$

$$\begin{array}{r} \boxed{} \\ 9 \overline{)54} \end{array}$$

$$\begin{array}{r} \boxed{} \\ 11 \overline{)99} \end{array}$$

$$\begin{array}{r} \boxed{} \\ 7 \overline{)63} \end{array}$$

$$\begin{array}{r} \boxed{} \\ 9 \overline{)27} \end{array}$$

$$\begin{array}{r} \boxed{} \\ 1 \overline{)9} \end{array}$$

$$\begin{array}{r} \boxed{} \\ 9 \overline{)36} \end{array}$$

$$\begin{array}{r} \boxed{} \\ 12 \overline{)108} \end{array}$$

$$\begin{array}{r} \boxed{} \\ 4 \overline{)36} \end{array}$$

$$\begin{array}{r} \boxed{} \\ 9 \overline{)81} \end{array}$$

$$\begin{array}{r} \boxed{} \\ 5 \overline{)45} \end{array}$$

$$\begin{array}{r} \boxed{} \\ 3 \overline{)27} \end{array}$$

$$\begin{array}{r} \boxed{} \\ 9 \overline{)9} \end{array}$$

$$\begin{array}{r} \boxed{} \\ 2 \overline{)18} \end{array}$$

$$\begin{array}{r} \boxed{} \\ 8 \overline{)72} \end{array}$$

$$\begin{array}{r} \boxed{} \\ 9 \overline{)63} \end{array}$$

$$\begin{array}{r} \boxed{} \\ 9 \overline{)45} \end{array}$$

$$\begin{array}{r} \boxed{} \\ 6 \overline{)54} \end{array}$$

$$\begin{array}{r} \boxed{} \\ 10 \overline{)90} \end{array}$$

$$\begin{array}{r} \boxed{} \\ 9 \overline{)18} \end{array}$$

$$\begin{array}{r} \boxed{} \\ 9 \overline{)108} \end{array}$$

Division :

Factor Fun

Khi bạn đọc một phép tính chia, hãy tự hỏi mình một phép tính nhân!

$$20 \div 5 = ?$$

Tự hỏi

$$5 \times ? = 20$$

5 nhân với số nào thì bằng 20?


$$30 \div 6 = \underline{\quad} \text{ because } 6 \times \underline{\quad} = 30$$

$$60 \div 10 = \underline{\quad} \text{ because } 10 \times \underline{\quad} = 60$$

$$63 \div 9 = \underline{\quad} \text{ because } 9 \times \underline{\quad} = 63$$


$$49 \div 7 = \underline{\quad} \text{ because } 7 \times \underline{\quad} = 49$$

$$48 \div 12 = \underline{\quad} \text{ because } 12 \times \underline{\quad} = 48$$





Math Crossword Puzzle



Điền vào chỗ trống của mỗi câu đố ô chữ sao cho phù hợp với mỗi phép tính.

64	÷		=	8			÷	2	=	27
÷				÷			÷			
	÷		=	2			÷	2	=	
=				=			=			
32			÷		=	9				9

			36	÷		=	2		68	
÷			÷		÷				÷	
12		81	÷		=					
=				=		=			=	
12	÷		=	4			÷	1	=	